

Revision worksheet

Grade: 2

Sub: Math

I. Write whether the following is true or false.


1. A cube is made up of six square shaped flat faces.
2. A cylinder has two flat face and one curved face.
3. Rectangle has three corners.

II. Identify the shapes and write the name using help box

Cuboid

cone



Circle



III. Trace the horizontal line with red, vertical line with green and slanting line with brown colour in the given picture.



IV. Write the number of corners and sides for the given shapes.

Shape	Sides	Corners
		
		

V. Draw any picture of your choice using only horizontal, vertical and curved lines.